

This question paper consist of 20 questions 12 pages Code no. ULLAS/01/24/ENGLISH/SET



Ullas Navbharat literacy programme

Fundamental literacy & number awareness Test (FLNAT)

Question cum Answer Booklet (QAB)

Instructions for examinee:

- 1) Examinee must fill all the information
- 2) Please check your papers properly before writing. Return it if it is torn, pages missing or not printed properly and take another paper
- 3) Do not take the question paper outside the exam hall.
- 4) Write the answers in the place given below that question.
- 5) Submit the paper to the supervisor present in the class. Do not leave it in your place.
- 6) Time limit for the exam is 3 hours only.
- 7) There are three sections in the question paper.
Section A – Reading
Section B – Writing
Section C – Knowledge of numbers.
- 8) All questions are compulsory. If the examinee is having any difficulty in understanding, the supervisor is expected to make them understand.

Section 'A' Reading

Total 50 marks






1) Identify the given alphabets in words and circle them. $1 \times 6 = 6$

(g) Morning game night


(a) Rain Seat Car

2) Draw lines to match the pairs

$1 \times 5 = 5$

a) Radio	
b) Comb	
c) Apple	
d) Axe	
e) Hammer	

3) Circle four names of the things you see in the picture
 $2 \times 4 = 8$




banana mango boy tree girl dog

4) Match the remaining part of the sentence correctly
 $2 \times 5 = 10$

Section A	Section B
(1) Colour of Letterbox	gets a job card.
(2) Holi is a	a fruit.
(3) Under NREG scheme every worker	by mosquitoes.
(4) Malaria is spread	festival of colours.
(5) Apple is	is red.

5) Observe the picture below and (✓) correct sentence and (✗) wrong sentence. $3 \times 3 = 9$



- 1) Ink is put on the finger of the voter at the voting centre. ()
- 2) During covid maintaining distance from each other is not compulsory ()
- 3) Indian election commission declares the voters list. ()

6) Observe the picture (✓) tick the correct sentence and (✗) the wrong sentence $2 \times 6 = 12$



- 1) The boy has an umbrella. ()
- 2) The cat is playing with the boy. ()
- 3) Two boys are playing in the rain. ()
- 4) It is raining from the clouds. ()
- 5) The boy is wearing shoes. ()
- 6) There is sun in the picture. ()

Section 'B': Writing

Total 50 Marks

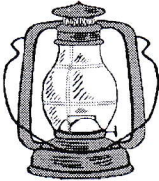


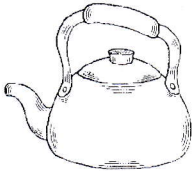

1) Make a word from given alphabet 2 × 3 = 6

K - _____

J - _____

B - _____

2) See the picture and write the names. 2 × 5 = 10

	<hr/> <hr/>
	<hr/> <hr/>
	<hr/> <hr/>
	<hr/> <hr/>
	<hr/> <hr/>

3) Pick out correct words from the box and fill in the blanks **2 × 4 = 8**

15 August, patients, fruit, cartoon

- 1) Mango is a _____.
- 2) Doctors treat the _____.
- 3) Indian Independence Day is celebrated on _____.
- 4) Mickey mouse is a _____ character.

4) Make sentences using the words given below
3 × 3 = 9

- 1) School - _____

- 2) Cow - _____

- 3) Farm - _____


5) Write the name and address of the school near you.

$1 \times 2 = 2$

Name of the school - -----

School Address - -----

6) Observe the given picture and write 5 sentences about it. $3 \times 5 = 15$



1) -----

2) -----

3) -----







4) -----

5) -----

Section 'C' Knowledge of numbers Total 50 Marks

1) Count the pictures given below and match with the numbers.

$$1 \times 6 = 6$$

	06
	08
	05
	11
	16
	20

2) Complete the number series.

$1 \times 5 = 5$

- a) 15 25 35 _____
- b) 80 100 _____ 140
- c) 150 _____ 250 300
- d) 35 40 _____ 50
- e) _____ 42 44 46

4) Match the things with their price.

$1 \times 3 = 3$

School bag - ₹500	 
Pen - ₹15	 
Battery - ₹150	

4) Solve the following. $2 \times 4 = 8$

a)
$$\begin{array}{r} 82 \\ + 21 \\ \hline \end{array}$$

b)
$$\begin{array}{r} 73 \\ - 26 \\ \hline \end{array}$$

c)
$$\begin{array}{r} 24 \\ \times 5 \\ \hline \end{array}$$

d)
$$\begin{array}{r} \\ 6 \overline{) 84} \end{array}$$

5) Solve the following word problems

2×4 = 8

a) Ramesh bought a chair for his mother for Rs. 450. He gave 5 notes of Rs.100 to the shopkeeper. How much money will the shopkeeper return to Ramesh ?

b) A doctor gave 100 millilitre medicine bottle to a patient and told him to take 10 millilitre of medicine every day. How many days of medicine did the patient get ?

6) Fill in the blanks

2×4 = 8

a) 24 hours = ----- day



b) 1 kilo gram = ----- grams

c) 100 centimetre = -----metre

d) 1000 millilitre = -----litre

7) Observe the watch and write the correct time.

$2 \times 4 = 8$

	
<p>-----hours ----- minutes</p>	<p>-----hours ----- minutes</p>

8) Observe the calendar and answer the questions given below. $1 \times 4 = 4$

MAY 2023

Sunday	Monday	Tuesday	Wednesday	Thursday	Friday	Saturday
	1	2	3	4	5	6
7	8	9	10	11	12	13
14	15	16	17	18	19	20
21	22	23	24	25	26	27
28	29	30	31			

- 1) Which day is on 25 May? -----
- 2) How many Mondays are there in the month of May ? -----
- 3) Which day is the last day in the month of May ? -----
- 4) What is the total number of days in the month of May ? -----
